




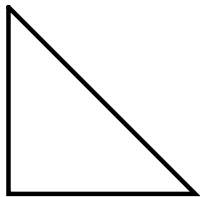
FINDING AREA



Square



Rectangle

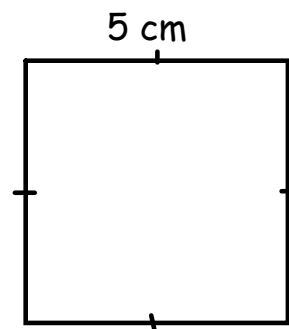


Triangle

Dec 8-9:08 AM

Connect

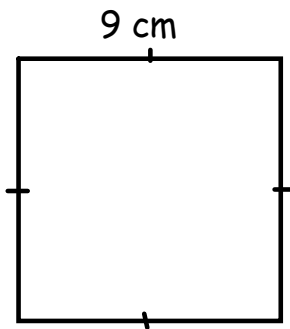
FINDING THE AREA OF A SQUARE



Dec 8-9:11 AM

YOU TRY!

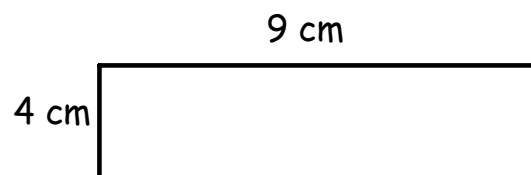
FINDING THE AREA OF A SQUARE



Dec 8-9:11 AM

Connect

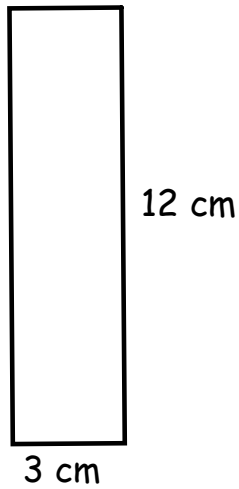
FINDING THE AREA OF A RECTANGLE



Dec 8-9:11 AM

YOU TRY!

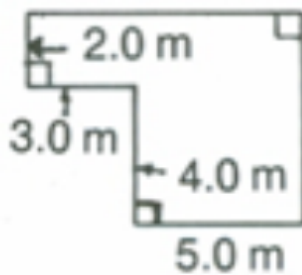
FINDING THE AREA OF A RECTANGLE



Dec 8-9:11 AM

Connect

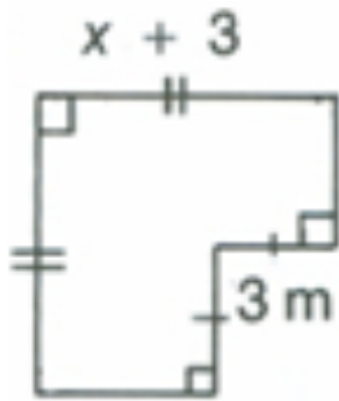
FINDING THE TOTAL AREA



Dec 8-9:11 AM

YOU TRY!

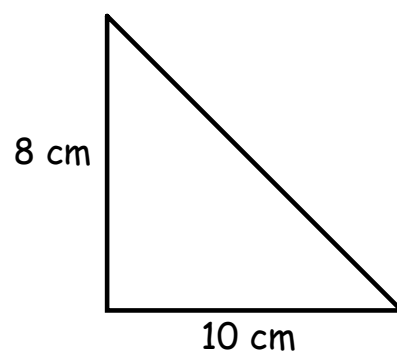
FINDING THE TOTAL AREA



Dec 8-9:11 AM

Connect

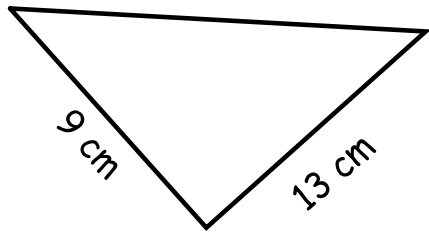
FINDING THE AREA OF A TRIANGLE



Dec 8-9:11 AM

YOU TRY!

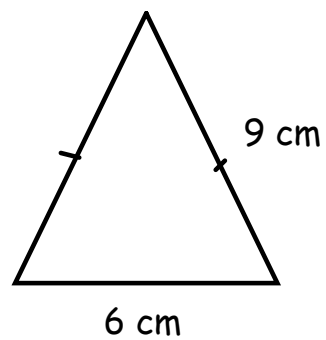
FINDING THE AREA OF A TRIANGLE



Dec 8-9:11 AM

Connect

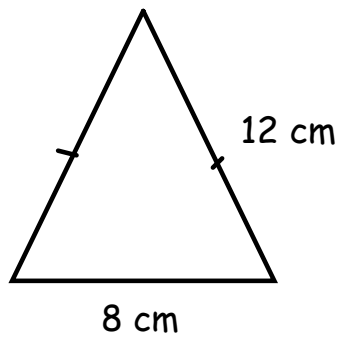
FINDING THE AREA OF A TRIANGLE



Dec 8-9:11 AM

YOU TRY!

FINDING THE AREA OF A TRIANGLE



Dec 8-9:11 AM

Practice

Complete Worksheet

Dec 8-9:23 AM